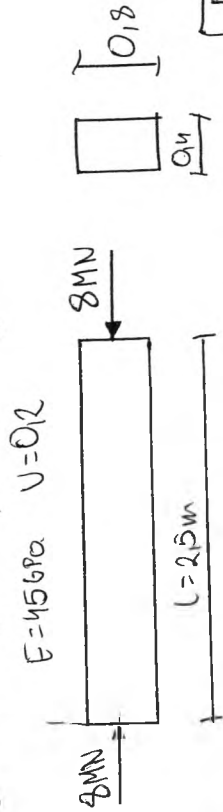


Obliczyć całkowitą energię potencjalną odkształcenia objętościowego i postawowego



$$\sigma_x = \frac{-8 \text{ MN}}{A} = \frac{-8000 \text{ kN}}{0.4 \cdot 0.18} = 25000 \text{ kN/m}^2$$

$$\epsilon = 456 \text{ Pa} = 45000 \text{ MPa} = 45 \cdot 10^6 \text{ kN/m}^2$$

$$\nu = 0.12$$

$$\phi_v = \frac{1-2\nu}{6E} \sigma_x^2 = \frac{1-2 \cdot 0.12}{6E} \cdot 2.22 \cdot 10^{-9} \left(\frac{\text{kN}}{\text{m}^2} \right)^{-1}$$

$$\phi_f = \frac{1+\nu}{3E} \sigma_x^2 = \frac{1+0.12}{3E} \cdot 8.89 \cdot 10^{-9} \left(\frac{\text{kN}}{\text{m}^2} \right)^{-1}$$

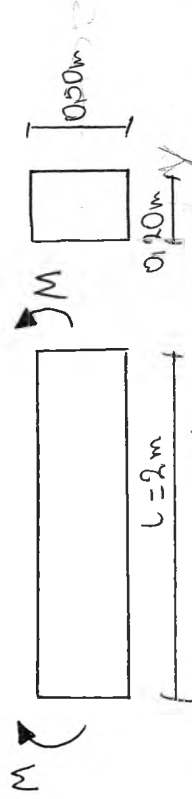
$$u_v = \int_V \phi_v dv = 2.22 \cdot 10^{-9} \int_0^{2.5} \int_{-0.1}^{0.1} \int_{-0.12}^{0.12} dx dy dz =$$

$$= 2.22 \cdot 10^{-9} \cdot x \cdot y \cdot z \Big|_{-0.12}^{0.12} \Big|_{-0.1}^{0.1} \Big|_0^{2.5} = 2.22 \cdot 10^{-9} \cdot 2.5 \cdot 0.8 \cdot 0.4 = 1.11 \text{ kNm}$$

$$u_f = \int_V \phi_f dv = 8.89 \cdot 10^{-9} \cdot 2.5 \cdot 0.8 \cdot 0.4 = 1.45 \text{ kNm}$$

$$u = u_v + u_f$$

$$u = 5.156 \text{ kNm}$$



$$M = 7.5 \text{ kNm} \quad G = \frac{M}{J_z} \cdot y = \frac{7.5}{\frac{12}{0.2 \cdot 0.5^3}} \cdot 0.2 \cdot 0.5^3 = 3600 \text{ kN/m}^2$$

$$E = 60 \text{ GPa} = 60 \cdot 10^6 \text{ kN/m}^2$$

$$\nu = 0.25$$

$$\phi_v = \frac{1-2\nu}{6E} \cdot 3600^2 \cdot y^2 = 0.018 y^2$$

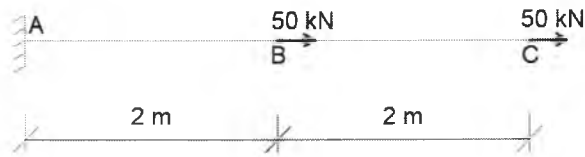
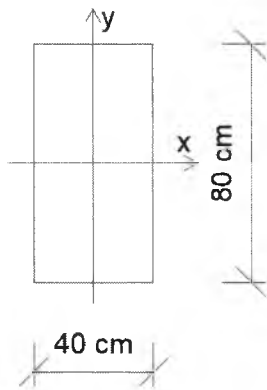
$$\phi_f = \frac{1+\nu}{3E} \cdot 3600^2 \cdot y^2 = 0.09 y^2$$

$$u_v = \int_V \phi_v dv = 0.018 \int_0^2 \int_{-0.25}^{0.25} \int_{-0.1}^{0.1} y^2 dx dy dz =$$

$$= 0.018 \cdot x \Big|_0^2 \cdot \frac{y^3}{3} \Big|_{-0.25}^{0.25} \cdot z \Big|_{-0.1}^{0.1} = 0.018 \cdot 2 \cdot \left(\frac{0.25^3}{3} + \frac{0.25^3}{3} \right) \cdot 0.1 = 7.5 \times 10^{-5} \text{ [kNm]}$$

$$u_f = \int_V \phi_f dv = 0.09 \cdot 2 \cdot \left(\frac{0.25^3}{3} + \frac{0.25^3}{3} \right) \cdot 0.1 = 3.75 \cdot 10^{-4}$$

Oblicz całkowitą energię sprężystą układu



$$E = 205 \text{ GPa}$$

$$\nu = 0,2$$

$$\sigma_x^{BC} = \frac{50}{0,4 \cdot 0,8} = 156,25 \frac{\text{kN}}{\text{m}^2} = 0,156 \text{ MPa}$$

$$\sigma_x^{AB} = \frac{100}{0,4 \cdot 0,8} = 312,50 \frac{\text{kN}}{\text{m}^2} = 0,313 \text{ MPa}$$

$$\phi_v = \frac{1 - 2\nu}{6E} (\sigma_x + \sigma_y + \sigma_z)^2$$

$$\phi_v^{BC} = \frac{1 - 2 \cdot 0,2}{6 \cdot 205 \cdot 10^3} \cdot 0,156^2 = 4,88 \cdot 10^{-7} \cdot 0,156^2 = 11,86 \cdot 10^{-9} \frac{1}{\text{MPa}}$$

$$\phi_v^{AB} = \frac{1 - 2 \cdot 0,2}{6 \cdot 205 \cdot 10^3} \cdot 0,313^2 = 47,81 \cdot 10^{-9} \frac{1}{\text{MPa}}$$

$$U_v = \int_V \phi_v^{BC} dV + \int_V \phi_v^{AB} dV$$

$$= 11,86 \cdot 10^{-9} \int_0^{2000} \int_{-200}^{200} \int_{-400}^{400} dx dy dz + 47,81 \cdot 10^{-9} \int_0^{2000} \int_{-200}^{200} \int_{-400}^{400} dx dy dz$$

$$= (11,86 \cdot 10^{-9} + 47,81 \cdot 10^{-9}) \cdot 2000 \cdot 400 \cdot 800 = 38,19 \text{ Nmm} = 0,038 \text{ J}$$

$$\phi_f = \frac{1 + \nu}{3E} [\sigma_x^2 + \sigma_y^2 + \sigma_z^2 - \sigma_x \sigma_y - \sigma_y \sigma_z - \sigma_x \sigma_z + 3(\tau_{xy}^2 + \tau_{yz}^2 + \tau_{xz}^2)]$$

$$\phi_f^{BC} = \frac{1 + 0,2}{3 \cdot 205 \cdot 10^3} \cdot 0,156^2 = 1,95 \cdot 10^{-6} \cdot 0,156^2 = 47,46 \cdot 10^{-9} \frac{1}{\text{MPa}}$$

$$\phi_f^{AB} = \frac{1 + 0,2}{3 \cdot 205 \cdot 10^3} \cdot 0,313^2 = 191,04 \cdot 10^{-9} \frac{1}{\text{MPa}}$$

$$U_f = (47,46 \cdot 10^{-9} + 191,04 \cdot 10^{-9}) \cdot 2000 \cdot 400 \cdot 800 = 152,64 \text{ Nmm} = 0,152 \text{ J}$$

$$U = U_v + U_f = 0,038 + 0,152 = 0,19 \text{ J}$$